

STATION 1	USES OF A HORSE
-----------	-----------------

1



2



3



4



5



6



7



8



9


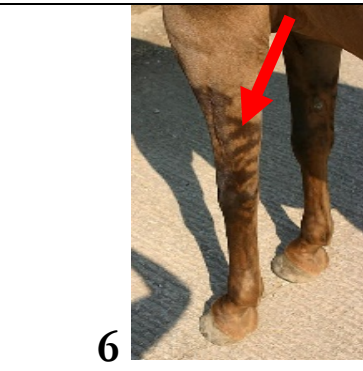

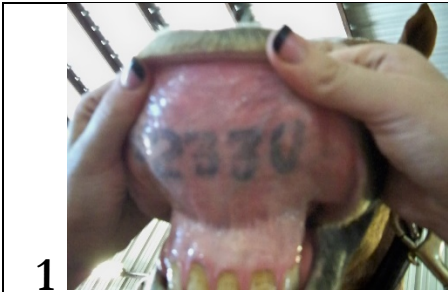


10



IDENTIFY THE ACTIVITY THE HORSE IS BEING USED IN FROM THE FOLLOWING LIST.

A	HACKNEY PONY DRIVING
B	CARRIAGE DRIVING
C	THERAPEUTIC RIDING
D	TRAIL RIDING
E	TRAIL CLASS
F	PONY RIDE
G	PARADES
H	COMPETITIVE DRIVING
I	MINIATURE HORSE DRIVING
J	DRAFT HORSE FARMING




IDENTIFY THE
COLOR OR MARKING FROM
THE FOLLOWING LIST


A	BLACK HORSE
B	STAR
C	BLAZE
D	ZEBRA STRIPE
E	FREEZE BRAND
F	LIP TATOO
G	DORSAL STRIPE
H	STOCKING
I	BAY HORSE
J	PALOMINO

STATION 3	QUARTER HORSE EVENTS
-----------	----------------------


1




2




3




4




5




6




7




8



9




10




IDENTIFY THE TYPE OF ARABIAN EVENT SADDLE FROM THE LIST BELOW

A	CUTTING
B	STADIUM JUMPING
C	HALTER
D	TRAIL
E	POLE BENDING
F	HUNTER UNDER SADDLE
G	TEAM PENNING
H	REINING
I	BARREL RACING
J	WESTERN PLEASURE


STATION 4	EQUIPMENT USED ON HORSES
-----------	--------------------------




1




2




3




4




5




6




7



8



9

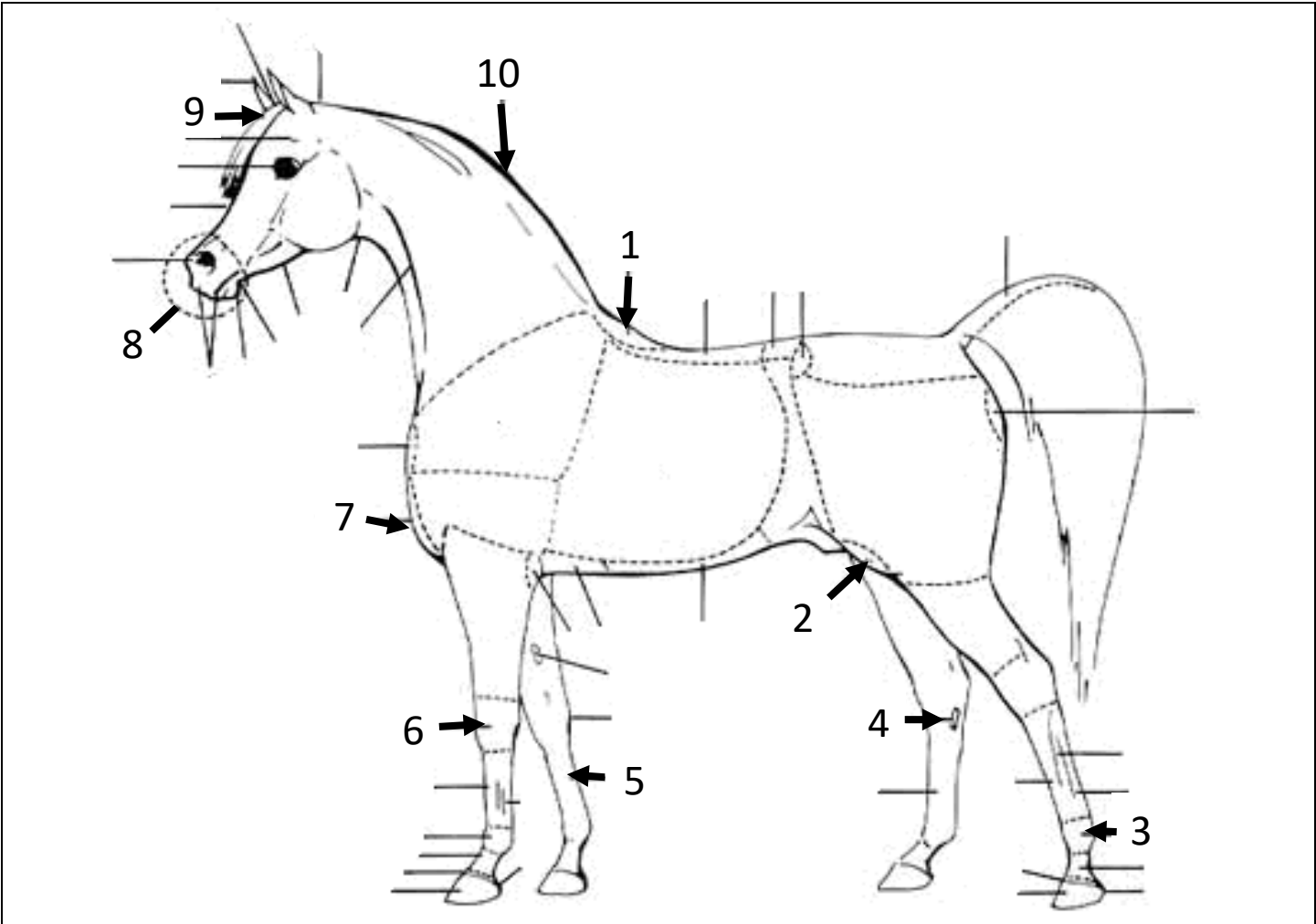


10

IDENTIFY THE EQUIPMENT USED ON HORSES FROM THE FOLLOWING LIST

A	HOBBLES
B	TOM THUMB CURB BIT
C	WESTERN SADDLE
D	HOOF PICK
E	DANDY BRUSH
F	RUNNING MARTINGALE
G	BELL BOOT
H	HUNT SEAT SADDLE
I	FULL CHEEK SNAFFLE
J	SHIPPING BOOTS

STATION 5	PARTS OF THE HORSE
-----------	--------------------




IDENTIFY THE PARTS OF THE HORSE FROM THE FOLLOWING LIST

A	MUZZLE	F	STIFLE
B	WITHERS	G	ANKLE
C	CHESTNUT	H	CHEST
D	CREST	I	KNEE
E	FORELOCK	J	CANNON


STATION 6

FEED STUFFS FOR HORSES


1




2




3




4




5




6




7




8



9



10




IDENTIFY THE
FEEDSTUFFS FED TO HORSES
FROM THE FOLLOWING LIST


A	ALFALFA HAY
B	MOLASSES
C	VEGETABLE OIL
D	TRACE MINERALIZED SALT BLOCK
E	ALFALFA CUBES
F	SOYBEAN MEAL
G	SHELLED CORN
H	BEET PULP SHREDS
I	OATS
J	TIMOTHY GRASS HAY

STATION 7	PAINT HORSE EVENTS
-----------	--------------------


1




2




3




4




5




6




7




8



9



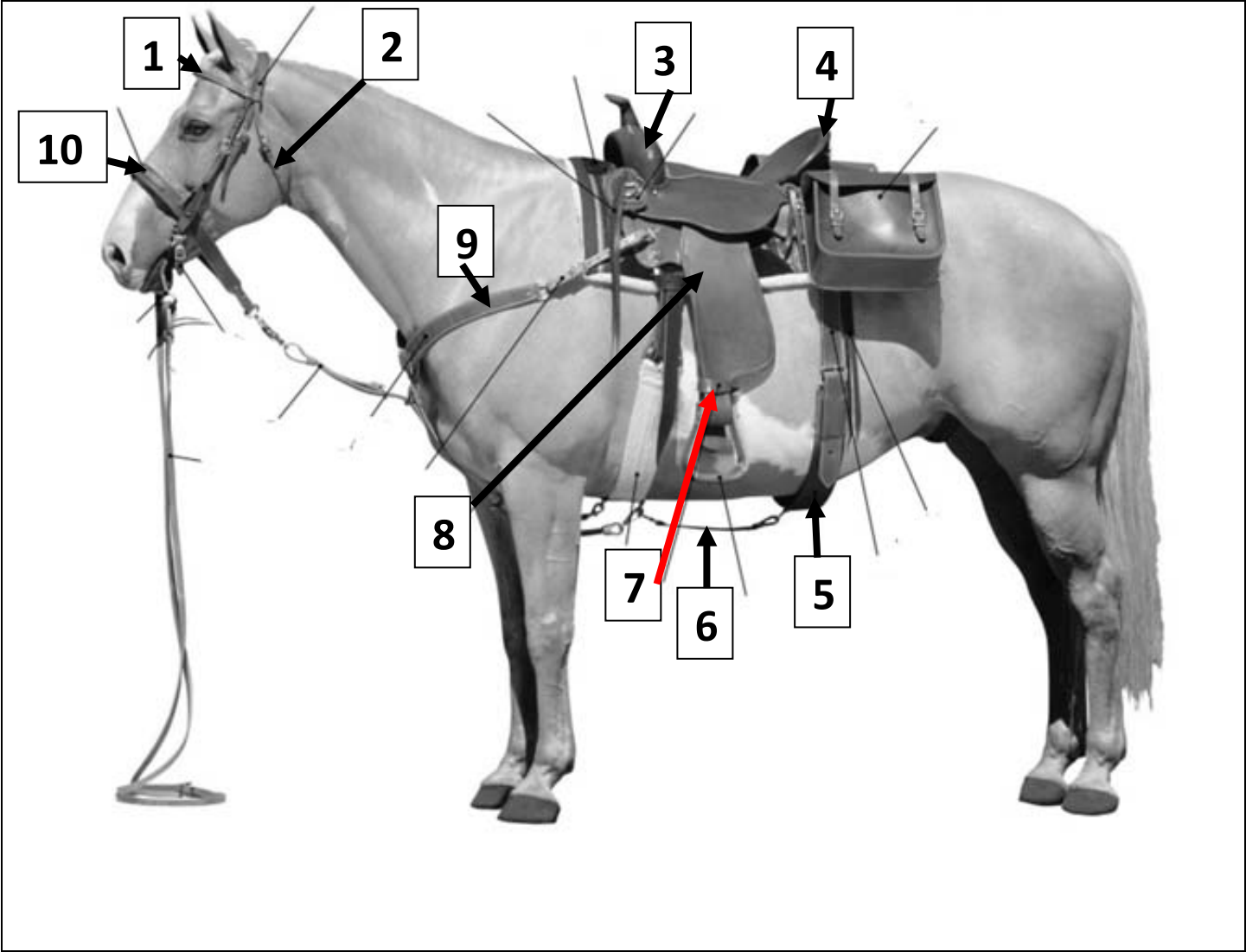
10



IDENTIFY THE TYPE OF PAINT HORSE EVENT FROM THE LIST BELOW

A	WORKING COW HORSE
B	BARREL RACING
C	HALTER
D	TRAIL
E	RACING
F	HUNTER UNDER SADDLE
G	SHOWMANSHIP
H	REINING
I	EVENTING
J	WESTERN PLEASURE

STATION 8	WESTERN TACK
-----------	--------------



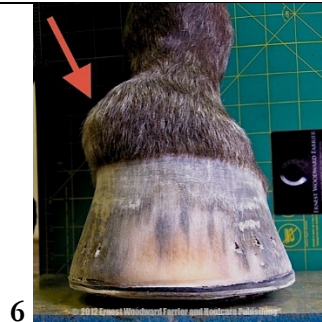
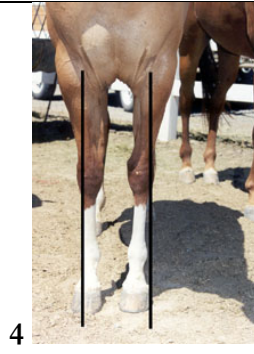
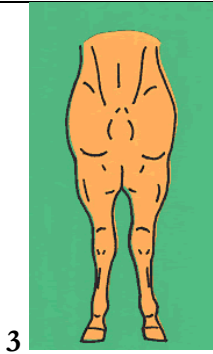
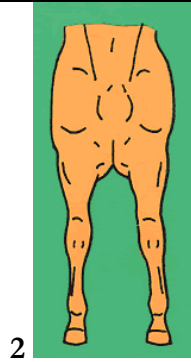


IDENTIFY THE WESTERN TACK FROM THE FOLLOWING LIST

A	FENDER	F	POMMEL
B	BROWBAND	G	HOBBLE STRAP
C	THROAT LATCH	H	NOSEBAND
D	CINCH CONNECTOR	I	BACK CINCH
E	CANTLE	J	BREAST COLLAR

STATION 9

CONFORMATION & UNSOUNDNESS



**IDENTIFY THE
CONFORMATION
FROM THE
FOLLOWING LIST**

A	COW HOCKED
B	TOED OUT
C	TOED IN
D	BASE WIDE
E	SICKLE-HOCKED
F	KNOCK-KNEES
G	FOUNDER
H	RINGBONE
I	BASE NARROW
J	BOWED TENDON

STATION 10

LEG PROTECTION

1



2



IDENTIFY THE LEG PROTECTION FROM THE FOLLOWING LIST

A	SPORTS MEDICINE BOOT
B	SKID BOOT
C	HOCK SWEAT BOOT
D	BELL BOOT
E	ANKLE BOOT
F	ICE BOOTS
G	POLO WRAP
H	SPLINT BOOT
I	TRAVEL (SHIPPING) BOOT
J	JUMP BOOTS

3



4



5



6



7



8



9



10



STATION 11

BREEDS OF HORSES & PONIES

1



2



IDENTIFY THE
BREED THE LIST
BELOW

A	AMERICAN CRÈME DRAFT
B	HAFLINGER
C	SHIRE
D	ANDALUSIAN
E	TENNESSEE WALKING HORSE
F	BELGIAN
G	PERCHERON
H	STANDARD BRED
I	CURLY HORSE
J	SHETLAND PONY

3



4



5



6



7



8

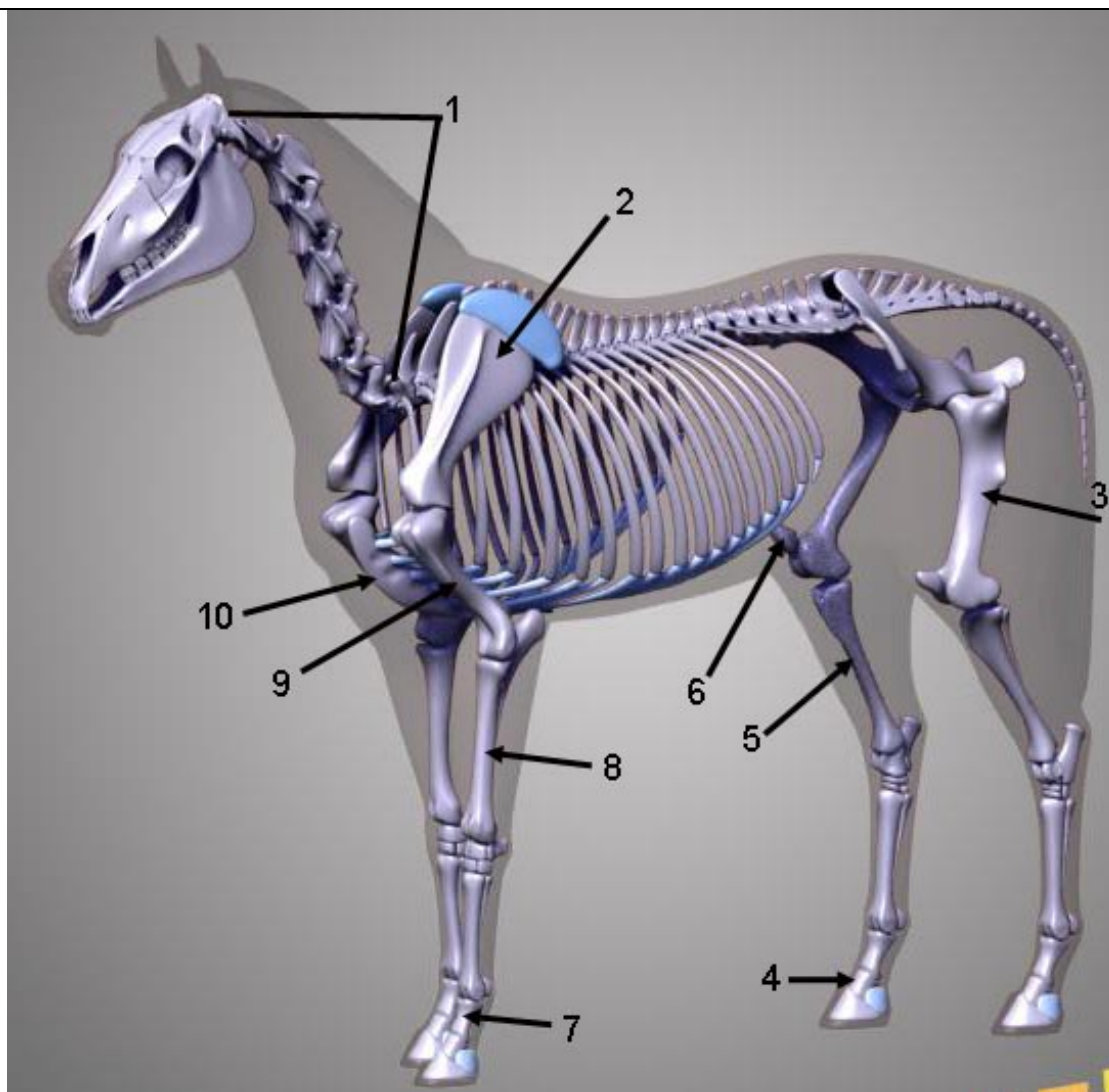


9



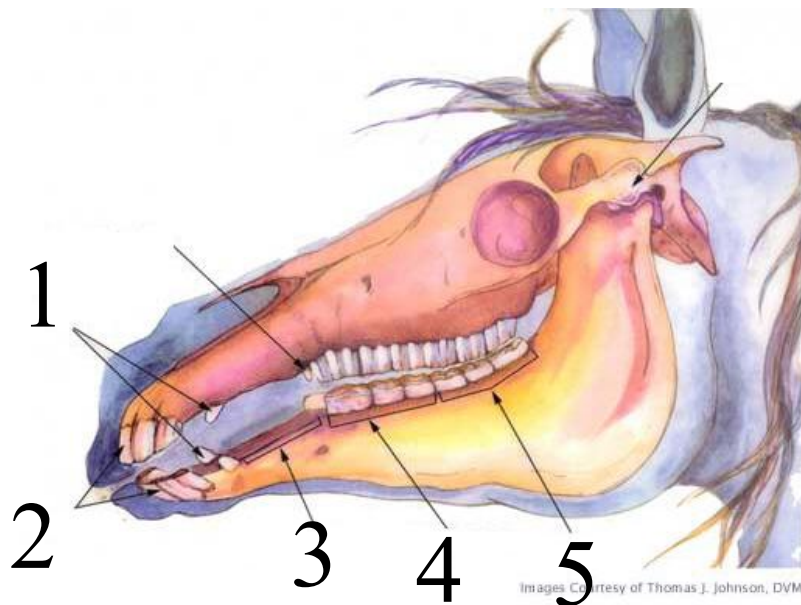
10





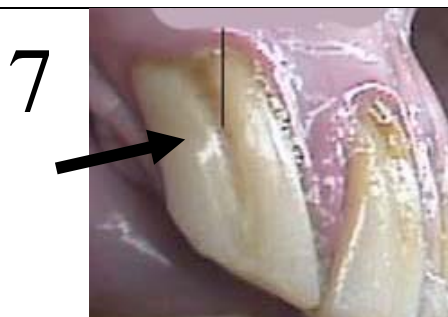
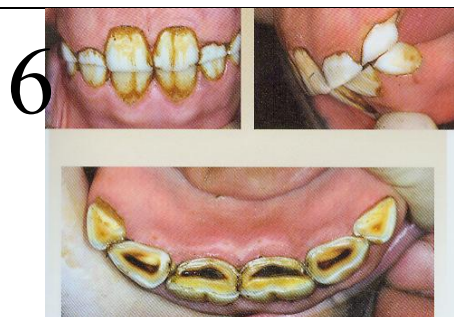
IDENTIFY THE PARTS OF THE SKELETON FROM THE FOLLOWING LIST

A	LONG PASTERB BONE	F	SCAPULA
B	RADIUS	G	STERNUM
C	TIBIA	H	CERVICAL VERTEBRAE
D	FEMUR	I	HUMEROUS
E	PATELLA	J	SHORT PASTERB BONE




IDENTIFY THE TEETH OR AGE
THE HORSE FROM THE
FOLLOWING LIST.

A	4 WEEKS
B	PREMOLAR
C	WOLF TOOTH
D	BAR
E	MOLAR
F	3-YEAR OLD
G	CANINES
H	20-YEAR OLD
I	GALVAYNES GROOVE
J	INCISORS



10



STATION 14		HORSE BEHAVIORS																						
1		2		<p>IDENTIFY THE HORSE BEHAVIORS FROM THE FOLLOWING LIST.</p> <table><tr><td>A</td><td>ESTRUS</td></tr><tr><td>B</td><td>INVESTIGATIVE</td></tr><tr><td>C</td><td>FIGHT FOR DOMINANCE</td></tr><tr><td>D</td><td>MUTUAL GROOMING</td></tr><tr><td>E</td><td>AUTOGROOM</td></tr><tr><td>F</td><td>SLEEPING</td></tr><tr><td>G</td><td>FLIGHT</td></tr><tr><td>H</td><td>CRIBBING</td></tr><tr><td>I</td><td>SNAKING POSTURE</td></tr><tr><td>J</td><td>FLEHMEN RESPONSE</td></tr></table>	A	ESTRUS	B	INVESTIGATIVE	C	FIGHT FOR DOMINANCE	D	MUTUAL GROOMING	E	AUTOGROOM	F	SLEEPING	G	FLIGHT	H	CRIBBING	I	SNAKING POSTURE	J	FLEHMEN RESPONSE
A	ESTRUS																							
B	INVESTIGATIVE																							
C	FIGHT FOR DOMINANCE																							
D	MUTUAL GROOMING																							
E	AUTOGROOM																							
F	SLEEPING																							
G	FLIGHT																							
H	CRIBBING																							
I	SNAKING POSTURE																							
J	FLEHMEN RESPONSE																							
3		4																						
5		6																						
7		8																						
9		10																						



1



2

IDENTIFY THE COAT COLORS FROM THE FOLLOWING LIST.

A	PALOMINO
B	BUCKSKIN OVERO
C	ROSE GREY
D	RED ROAN
E	CREMELLO
F	STEEL GREY
G	BLACK OVERO
H	CHESTNUT
I	BAY
J	GRULLO TOBIANO



3



4



5



6



7



8



9



10

IDENTIFY WHAT GAIT
THE HORSE IS
PERFORMING USING THE
LIST BELOW

A PACE

B LEFT LEAD
CANTER

C TROT

D WALK

E RIGHT LEAD
CANTER

F FLYING PACE

G RIGHT LEAD
GALLOP

H SIDEPASS

I LEFT LEAD GALLOP

J RACK

1



2



3



4



5



6



7



8



9



10



HIPPOLOGY STATION ANSWERS

STATION 1 – USE OF A HORSE	
Question	Answer
1	E TRAIL CLASS
2	C THERAPEUTIC RIDING
3	D TRAIL RIDING
4	J DRAFT HORSE FARMING
5	B CARRIAGE DRIVING
6	I MINIATURE HORSE DRIVING
7	A HACKNEY PONY DRIVING
8	G PARADES
9	F PONY RIDE
10	H COMPETITIVE DRIVING

STATION 2 – IDENTIFICATION OF HORSES	
Question	Answer
1	F LIP TATOO
2	G DORSAL STRIPE
3	A BLACK HORSE
4	I BAY HORSE
5	B STAR
6	D ZEBRA STRIPE
7	E FREEZE BRAND
8	H STOCKING
9	C BLAZE
10	J PALOMINO

STATION 3 – QUARTER HORSE EVENTS	
Question	Answer
1	C HALTER
2	I BARREL RACING
3	D TRAIL
4	B STADIUM JUMPING
5	A CUTTING
6	F HUNTER UNDER SADDLE
7	H REINING
8	J WESTERN PLEASURE
9	G TEAM PENNING
10	E POLE BENDING

STATION 4 – EQUIPMENT USED ON HORSES	
Question	Answer
1	C WESTERN SADDLE
2	E DANDY BRUSH
3	A HOBBLER
4	B TOM THUMB CURB
5	G BELL BOOT
6	J SHIPPING BOOTS
7	F RUNNING MARTINGALE
8	D HOOF PICK
9	I FULL CHEEK SNAFFLE
10	H HUNT SEAT SADDLE

STATION 5 – PARTS OF THE HORSE	
Question	Answer
1	B WITHERS
2	F STIFLE
3	G ANKLE
4	C CHESTNUT
5	J CANNON
6	I KNEE
7	H CHEST
8	A MUZZLE
9	E FORELOCK
10	D CREST

STATION 6 – FEED STUFFS	
Question	Answer
1	D TMS BLOCK
2	G SHELLED CORN
3	A ALFALFA HAY
4	F SOYBEAN MEAL
5	H BEET PULP SHREDS
6	I OATS
7	E ALFALFA CUBES
8	B MOLASSES
9	C VEGETABLE OIL
10	J TIMOTHY GRASS HAY

STATION 7 – PAINT HORSE EVENTS	
Question	Answer
1	C HALTER
2	D TRAIL
3	J WESTERN PLEASURE
4	H REINING
5	B BARREL RACING
6	A WORKING COW HORSE
7	I EVENTING
8	F HUNTER UNDER SADDLE
9	G SHOWMANSHIP
10	E RACING

STATION 8- WESTERN TACK	
Question	Answer
1	B BROWBAND
2	C THROAT LATCH
3	F POMMEL
4	E CANTLE
5	I BACK CINCH
6	D CINCH CONNECTOR
7	G HOBBLE STRAP
8	A FENDER
9	J BREAST COLLAR
10	H NOSEBAND

STATION 9 CONFORMATION & UNSOUNDNESS	
Question	Answer
1	C TOED IN
2	D BASE WIDE
3	F KNOCK KNEES
4	I BASE NARROW
5	G FOUNDER
6	H RINGBONE
7	E SICKLE HOCKED
8	A COW HOCKED
9	J BOWED TENDON
10	B TOED OUT

STATION 13 - HORSE DENTAL ANATOMY	
Question	Answer
1	G CANINES
2	J INCISORS
3	D BAR
4	B PREMOLARS
5	E MOLARS
6	F 3 – YEAR OLD
7	I GALVAYNES GROOVE
8	H 20 YR. OLD
9	A 4 WEEKS
10	C WOLF TOOTH

STATION 10 – LEG PROTECTION	
Question	Answer
1	F ICE BOOTS
2	A SPORTS MEDICINE BOOTS
3	C HOCK SWEAT BOOT
4	H SPLINT BOOT
5	D BELL BOOT
6	E ANKLE BOOT
7	J JUMP BOOTS
8	B SKID BOOT
9	I TRAVEL BOOT
10	G POLO WRAP

STATION 11 BREEDS OF HORSES AND PONIES	
Question	Answer
1	A AMERICAN CRÈME DRAFT
2	J SHETLAND PONY
3	D ANDALUSIAN
4	B HAFLINGER
5	C SHIRE
6	I CURLY HORSE
7	E TENNESEE WALKING HORSE
8	H STANDARD BRED
9	G PERCHERON
10	F BELGIAN

STATION 12 - PARTS OF THE SKELETON s	
Question	Answer
1	H CERVICAL VERTEBRAE
2	F SCAPULA
3	D FEMUR
4	J SHORT PASTER N BONE
5	C TIBIA
6	E PATELLA
7	A LONG PASTER N BONE
8	B RADIUS
9	I HUMEROUS
10	G STERNUM

STATION 14 – HORSE BEHAVIORS	
Question	Answer
1	I SNAKING POSTURE
2	G FLIGHT
3	C FIGHT FOR DOMINANCE
4	J FLEHMAN RESPONSE
5	A ESTRUS
6	D MUTUAL GROOM
7	H CRIBBING
8	E AUTOGROOM
9	F SLEEPING
10	B INVESTIGATIVE

STATION 15 – COAT COLORS	
Question	Answer
1	D RED ROAN
2	A PALOMINO
3	B BUCKSKIN OVERO
4	F STEEL GREY
5	H CHESTNUT
6	E CREMELLO
7	C ROSE GREY
8	J GRULLO TOBIANO
9	G BLACK OVERO
10	I BAY

STATION 16 - HORSE GAITS s	
Question	Answer
1	
2	D WALK
3	G RIGHT LEAD GALLOP
4	C TROT
5	B LEFT LEAD CANTER
6	H SIDE PASS
7	I LEFT LEAD GALLOP
8	F FLYING PACE
9	A PACE
10	J RACK